






# Meter und Zentimeter

1 Setze ein: m oder cm.

				
150 ____	2 ____	500 ____	30 ____	1 ____

2 Wandle um in cm.

a)  $1 \text{ m} = \underline{100} \text{ cm}$       b)  $5 \text{ m} = \underline{\quad} \text{ cm}$       c)  $300 \text{ cm} = \underline{\quad} \text{ m}$

$4 \text{ m} = \underline{\quad} \text{ cm}$        $7 \text{ m} = \underline{\quad} \text{ cm}$        $100 \text{ cm} = \underline{\quad} \text{ m}$

$2 \text{ m} = \underline{\quad} \text{ cm}$        $8 \text{ m} = \underline{\quad} \text{ cm}$        $400 \text{ cm} = \underline{\quad} \text{ m}$

3 a)  $1 \text{ m } 11 \text{ cm} = \underline{111} \text{ cm}$

b)  $1 \text{ m } 50 \text{ cm} = \underline{\quad} \text{ cm}$

$1 \text{ m } 15 \text{ cm} = \underline{\quad} \text{ cm}$

$6 \text{ m } 21 \text{ cm} = \underline{\quad} \text{ cm}$

$5 \text{ m } 98 \text{ cm} = \underline{\quad} \text{ cm}$

$1 \text{ m } 5 \text{ cm} = \underline{\quad} \text{ cm}$

4 a)  $225 \text{ cm} = \underline{2} \text{ m } \underline{25} \text{ cm}$

b)  $175 \text{ cm} = \underline{\quad} \text{ m } \underline{\quad} \text{ cm}$

$551 \text{ cm} = \underline{\quad} \text{ m } \underline{\quad} \text{ cm}$


$105 \text{ cm} = \underline{\quad} \text{ m } \underline{\quad} \text{ cm}$

$130 \text{ cm} = \underline{\quad} \text{ m } \underline{\quad} \text{ cm}$


$209 \text{ cm} = \underline{\quad} \text{ m } \underline{\quad} \text{ cm}$

5 Immer 1 m.


a)

	
50 cm	
	80 cm
30 cm	
	10 cm

b)

	
75 cm	
	99 cm
	90 cm
55 cm	

c)

	
35 cm	
	2 cm
87 cm	
	0 cm

6 Wandle um.

a)  $1,57 \text{ m} = \underline{\quad} \text{ cm}$       b)  $1,07 \text{ m} = \underline{\quad} \text{ cm}$       c)  $528 \text{ cm} = \underline{\quad} \text{ m}$

$3,15 \text{ m} = \underline{\quad} \text{ cm}$        $4,02 \text{ m} = \underline{\quad} \text{ cm}$        $273 \text{ cm} = \underline{\quad} \text{ m}$

$2,34 \text{ m} = \underline{\quad} \text{ cm}$        $0,36 \text{ m} = \underline{\quad} \text{ cm}$        $101 \text{ cm} = \underline{\quad} \text{ m}$